

Name: _____

Date: _____

0A.1: Some Review Problems

Let $f(x) = 2x + 1$ and $g(x) = 2x^2 + x$. Evaluate and completely simplify the following

1. $f(2) + g(-2)$

2. $f(2a)$

3. $g(2a)$

4. $f(-x)$

5. $g(-x)$

6. $f(2 + a)$

7. $g(2 + a)$

8. $(f - g)(x)$

9. $f(x) \cdot g(x)$

10. $\frac{f(x)}{g(x)}$

11. $f(g(x))$

12. $g(f(x))$

13. $\frac{1}{x}g(x)$

14. $\frac{f(x+\Delta x) - f(x)}{\Delta x}$

15. $\frac{g(x+\Delta x) - g(x)}{\Delta x}$

16. For each of the following, describe how the graph of the given function is a transformation (translated up/down, left/right, or reflected, or stretched, etc.) of its parent function $g(x) = 2x^2 + x$. Graph if necessary, but make a hypothesis first.

a. $g(x) + 2$

b. $g(x + 2)$

c. $-g(x)$

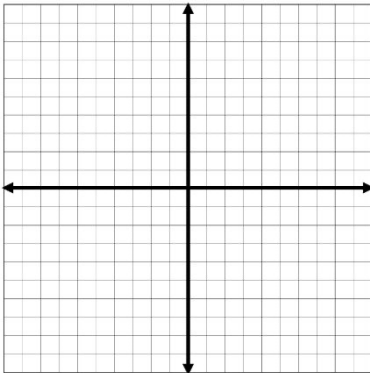
d. $g(-x)$

e. $2g(x)$

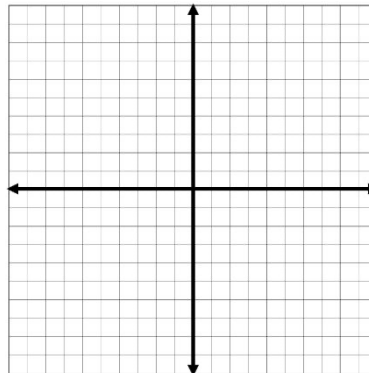
f. $g(2x)$

17. Graph each pair of functions and describe how the two graphs are different:

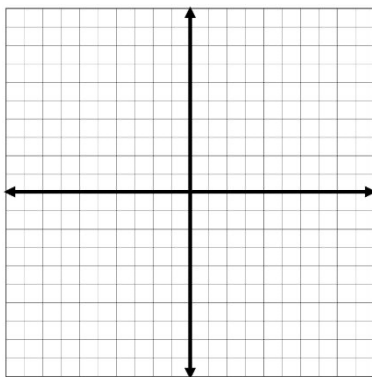
a. $f(x) = x + 2$



$g(x) = \frac{x^2 + 2x}{x}$



b. $f(x) = \frac{x}{x+2}$



$g(x) = \frac{x^2}{x^2 + 2x}$

